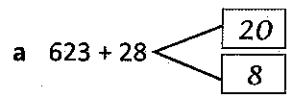
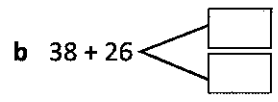


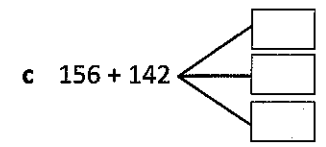
1 Use the split strategy to add the numbers. The first one has been done for you.



$623 + 20 = 643$
 $643 + 8 = 651$
 $623 + 28 = 651$



 $38 + 26 =$



 $156 + 142 =$

3 Work out the answers to these questions by using the split strategy. See if you can do the working in your head. If it helps, make notes as you go:

a $173 + 36 =$

b $446 + 51 =$

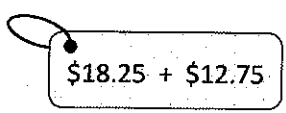
c $112 + 83 =$

d $724 + 72 =$

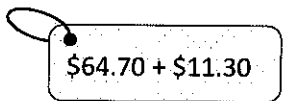
e $475 + 122 =$

f $123 + 164 =$

5 Match the price tags with the bills:

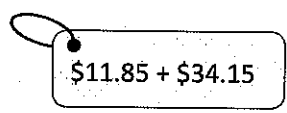


Total: \$31



Total: \$46

Total: \$76



Total: \$130

