


24 Hour Clock

Sheet 1

Read the clock and write the time in both 12-hour and 24-hour notation.


1)



12-hour: _____ A.M.

24-hour: _____

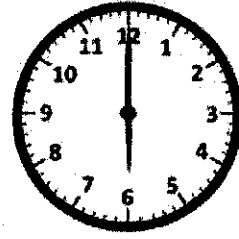
2)



12-hour: _____ P.M.

24-hour: _____


3)



12-hour: _____ P.M.

24-hour: _____


4)



12-hour: _____ P.M.

24-hour: _____

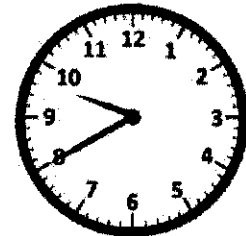
5)



12-hour: _____ A.M.

24-hour: _____


6)



12-hour: _____ P.M.

24-hour: _____

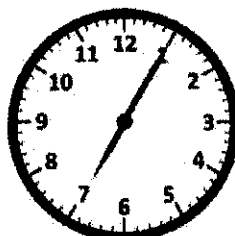
7)



12-hour: _____ A.M.

24-hour: _____


8)



12-hour: _____ P.M.

24-hour: _____

9)



12-hour: _____ A.M.

24-hour: _____


10)



12-hour: _____ P.M.

24-hour: _____

11)



12-hour: _____ A.M.

24-hour: _____

12)



12-hour: _____ P.M.

24-hour: _____

24 Hour Clock

Sheet 2

Match the times :

24-hour clock**12-hour clock**

1) 20:00

2) 13:00

3) 11:00

4) 16:00

5) 19:00

6) 2:00

7) 22:00

8) 3:00

9) 17:00

10) 6:00

a) 4:00 P.M.

b) 7:00 P.M.

c) 6:00 A.M.

d) 8:00 P.M.

e) 2:00 A.M.

f) 3:00 A.M.

g) 11:00 A.M.

h) 5:00 P.M.

i) 1:00 P.M.

j) 10:00 P.M.

24 Hour Clock Sheet 3

Match the times :

24-hour clock

12-hour clock

1) 15:00

a) 11:00 P.M.

2) 23:00

b) 9:00 P.M.

3) 1:00

c) 10:00 A.M.

4) 18:00

d) 4:00 P.M.

5) 21:00

e) 1:00 A.M.

6) 5:00

f) 6:00 P.M.

7) 14:00

g) 5:00 A.M.

8) 16:00

h) 3:00 P.M.

9) 7:00

i) 2:00 P.M.

10) 10:00

j) 7:00 A.M.

24 Hour Clock

Sheet 4

Read the clock and write the time in both 12-hour and 24-hour notation.


1)



12-hour: _____ A.M.

24-hour: _____

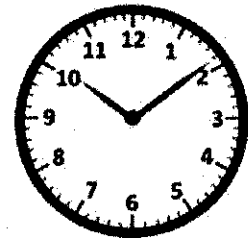
2)



12-hour: _____ P.M.

24-hour: _____


3)



12-hour: _____ P.M.

24-hour: _____


4)



12-hour: _____ P.M.

24-hour: _____


5)



12-hour: _____ A.M.

24-hour: _____


6)



12-hour: _____ P.M.

24-hour: _____


7)



12-hour: _____ A.M.

24-hour: _____


8)



12-hour: _____ P.M.

24-hour: _____

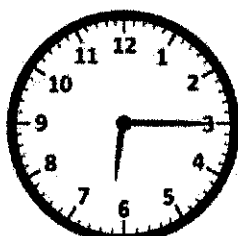
9)



12-hour: _____ A.M.

24-hour: _____


10)



12-hour: _____ P.M.

24-hour: _____


11)



12-hour: _____ A.M.

24-hour: _____

12)



12-hour: _____ P.M.

24-hour: _____